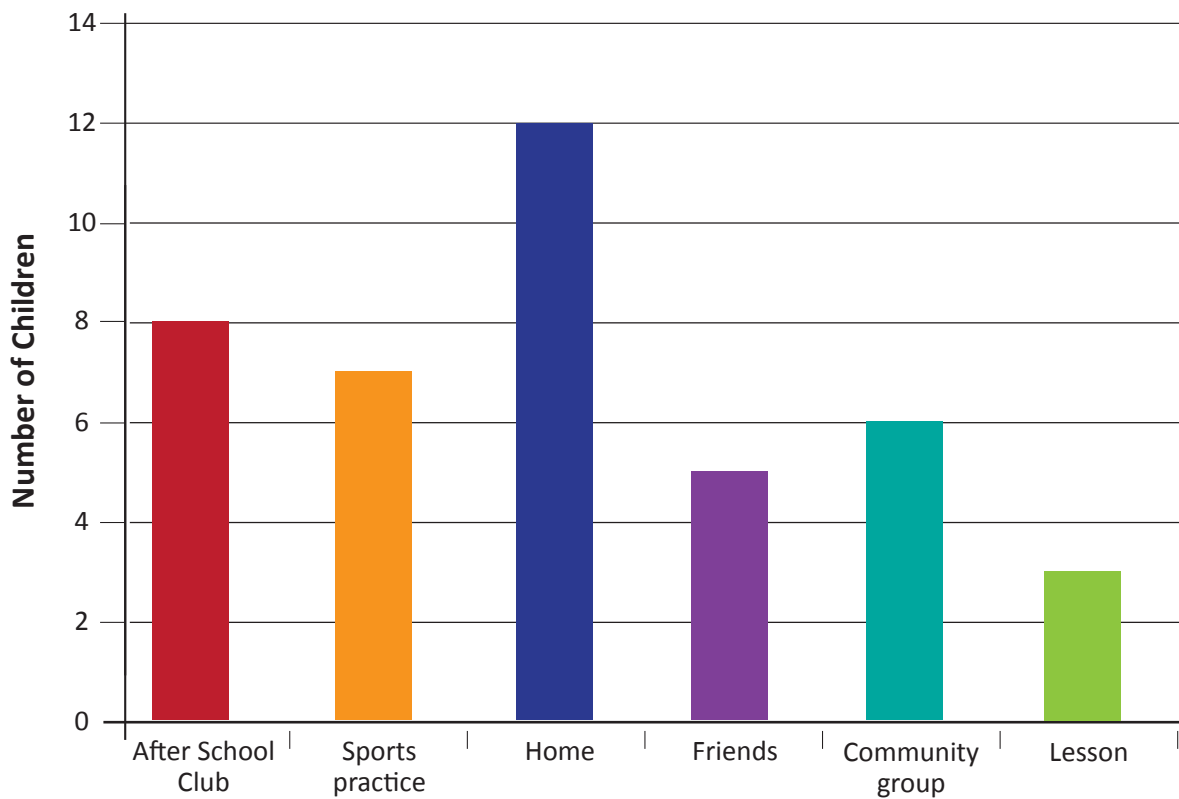


After School Activities



**Community groups are groups like Scouts and Kapa Haka Lesson includes music, art, dance, drama lessons.*

Tick the statements which you agree with.


- Eight children went to the After School club.
- More children go to Sport practise than a Friends house.
- Two more children went Home than went After School club.
- Three children went to a lesson.
- Sport practice was the second most popular after school activity.


Write two of your own statements about this graph.

- 1.
- 2.

Favourite Fruit



 Banana

 Orange

 Pear

 Apple

 Plum

Tick the statements which you agree with.

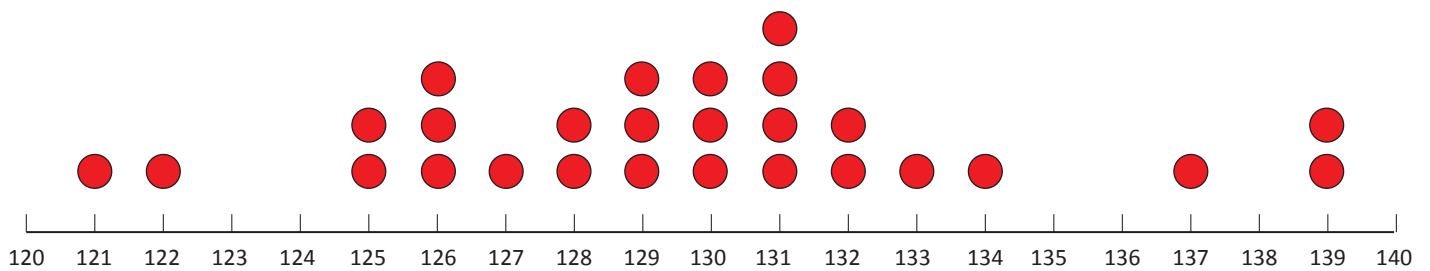
- Three people picked pears.
- Two more people picked bananas than picked apples.
- Plums are more popular than oranges.
- Four people picked oranges.
- Oranges are the second most popular fruit.

Write 2 of your own statements about this graph.

1.

2.

Height of Children in Room 6



Tick the statements which you agree with.

- Three people are 126 centimetres tall.
- The shortest person in Room 6 is 121 centimetres tall.
- The tallest person is 131 centimetres tall.
- 127 centimetres is tall in this class.
- Three people are over 135 centimetres tall.

Write 2 of your own statements about this graph.

1.

2.