


Getting Partial to Percentages: File downloads

For each bar write the percentage of the file that is downloaded.
Explain why you chose that percentage.

1.



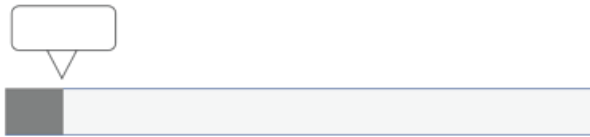
2.



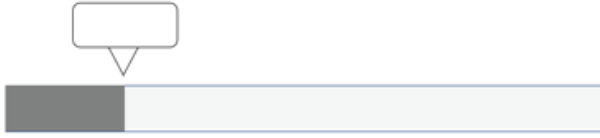
3.



4.



5.



6.



7.



8.




Getting Partial to Percentages: File downloads

For the next problems shade each bar to show the percentage.


9.

60%



10.

28%



11.

93%



12.

55%



13.

71%



14.

18%



15.

37.5%



16.

83.1%



Choose a percentage that you want to show. Shade the bar to match that percentage. Show the bar to a partner. Can they name your percentage?

