

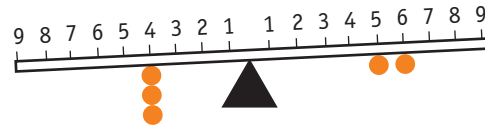
See-saw Numbers

You need a number balance


a classmate

Activity

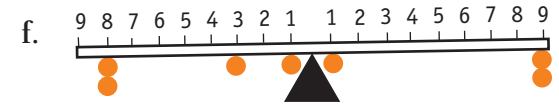
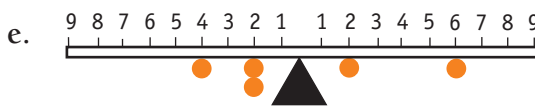
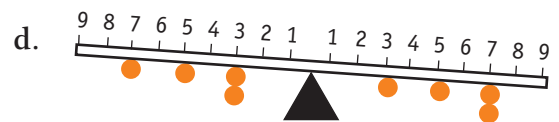
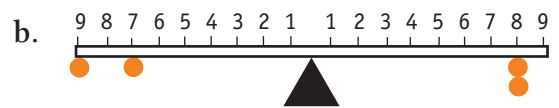
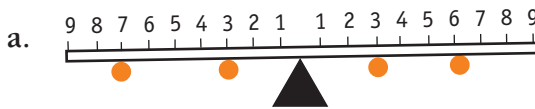
This number balance shows that 3×4 is greater than $5 + 6$.



$$3 \times 4 > 5 + 6$$



1. Write statements using $>$, $<$, or $=$ to describe what is shown on each number balance.



2. Make up some number balance pictures for a classmate to write $>$, $<$, or $=$ statements about. Discuss with your classmate how they worked out the number balance statements.

