


INTERVIEW 3 TASK 2

$$2 + 4 = \square$$

INTERVIEW 3 TASK 3

$$8 + 5 = \square$$

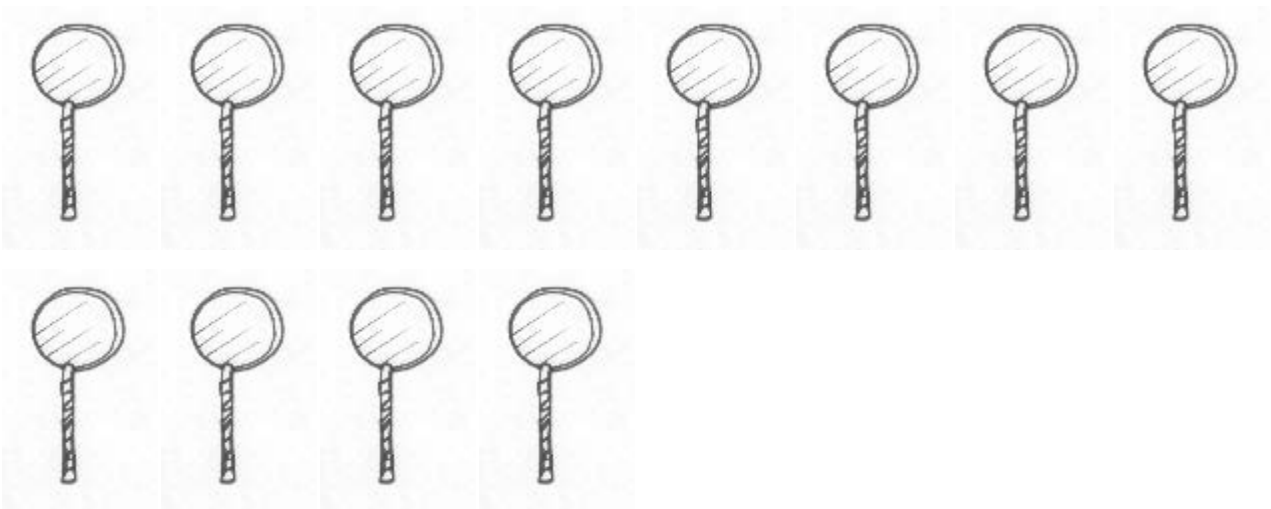
**INTERVIEW 3 TASK 4**



**There are 6 houses in each row.  
There are 3 rows of houses.  
How many houses are there altogether?**

**INTERVIEW 3 TASK 5**

**You have 12 lollipops for your party.  
A quarter of the lollipops are lemon.**



**How many lemon lollipops are there?**

**INTERVIEW 3 TASK 6**

**Tui has \$36.  
She needs \$58 to buy a kitten.**



**How much more does she need to save?**

**INTERVIEW 3 TASK 7**

**There were 45 students at a quiz night.  
Each team had 5 students in it.**



**How many teams were competing in the quiz?**

**INTERVIEW 3 TASK 8**

**Kimberley irons her 8 T-shirts in 4 minutes.**



**How long does it take her to iron 1 T-shirt?**

**INTERVIEW 3 TASK 9**


**There were 128 lambs in a field.  
Another 74 lambs joined them.**



**How many lambs were there altogether?**

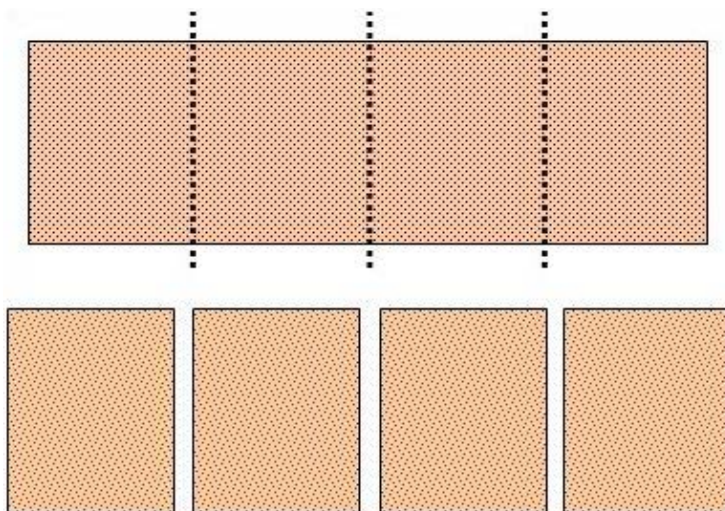
**INTERVIEW 3 TASK 10**

**Ra has 6 packets of biscuits.  
There are 15 biscuits in each packet.**



**How many biscuits does Ra have?**

**INTERVIEW 3 TASK 11**



**You cut a lamington into  
4 equal pieces.**

**Then you cut each piece  
in half.**

**What fraction of the  
lamington are these  
smaller pieces?**

**INTERVIEW 3 TASK 12**

**Mitchell had 231 toy cars in his collection.  
He sold 78 of them.**



**How many cars did he have left?**

**INTERVIEW 3 TASK 13**

**The teacher bought 48 packs of pencils at the  
beginning of the year.  
There were 5 pencils in each pack.**



**How many pencils did she buy?**

**INTERVIEW 3 TASK 14**

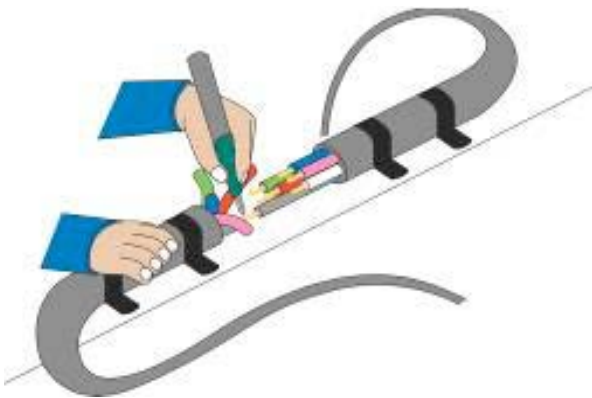
**Three friends share two pizzas.**



**What fraction of a pizza does each friend get?**

**INTERVIEW 3 TASK 15**


**The electrician has 5.33 metres of cable.  
He uses 2.9 metres on a job.**



**How much cable is left?**

**INTERVIEW 3 TASK 16**

**Solomona has ordered 81 tennis balls.  
They are in cans of 3 balls.**



**How many cans should there be?**

**INTERVIEW 3 TASK 17**


**Mihi and Josh have three-quarters ( $\frac{3}{4}$ ) of a cake.  
They share it equally.**



**How much cake does each person get?**



**INTERVIEW 3 TASK 18**



**The ceiling is 2.3 metres high.  
The bookcase is 1.845 metres high.**

**How high, in metres, is the space between the bookcase and the ceiling?**

**INTERVIEW 3 TASK 19**



**Joni has 1.5 kilograms of butter in the fridge.  
A batch of scones requires 0.075 kilograms of butter.**

**How many batches of scones will Joni be able to bake?**

**INTERVIEW 3 TASK 20**

**One-fifth ( $\frac{1}{5}$ ) of the birds on the lake are swans.  
There are 40 other birds on the lake.**



**How many birds are on the lake altogether?**

**INTERVIEW 3 TASK 21**


**Petrol costs 210.9 cents a litre.  
Your car takes 40 litres.**



**Will you be able to buy 40 litres if you have \$85?**

**INTERVIEW 3 TASK 22**

**Mei-ling saved \$40 in 16 weeks.  
She saved the same amount each week.**



**How much had she saved after 6 weeks?**