

INTERVIEW 2 TASK 2


$$2 + 5 = \square$$

INTERVIEW 2 TASK 3

$$8 + 6 = \square$$

INTERVIEW 2 TASK 4

**There are 5 motorbikes in each row.
There are 5 rows of motorbikes.**




How many motorbikes are there altogether?

INTERVIEW 2 TASK 5

**These 15 players have to spread
out evenly on the court.**



**How many players should be in
each third of the court?**



INTERVIEW 2 TASK 6

**I have 84 cards.
I give 7 cards to my friend.**



How many cards do I have left?

INTERVIEW 2 TASK 7

**You have 30 balls to put into bags.
Each bag can hold 5 balls.**



How many bags do you need?

INTERVIEW 2 TASK 8

The white piece is one-quarter of a strip.



What fraction is the grey piece?

INTERVIEW 2 TASK 9

**Miriama scored 476 points on a video game.
Deb scored 123 points on the same game.**



How many more points did Miriama score than Deb?

INTERVIEW 2 TASK 10

A pack of felt pens cost \$8.



How many packs of felt pens can you buy for \$88?


INTERVIEW 2 TASK 11



**Which is more money:
one-half ($\frac{1}{2}$) of \$20 or one-quarter ($\frac{1}{4}$) of \$40?**

INTERVIEW 2 TASK 12

**Leeana counted 82 penguins on the beach.
Later there were only 44.**



How many penguins had left the beach?

INTERVIEW 2 TASK 13

**Tom has 8 times as many stickers as Sarah.
Tom has 72 stickers.**



How many stickers does Sarah have?

INTERVIEW 2 TASK 14

There are 8 swans on the lake.

The other two-thirds ($\frac{2}{3}$) of the birds on the lake are ducks.



How many ducks are there on the lake?

INTERVIEW 2 TASK 15



The world record for men's shot put is 23.12 metres.

The world record for women is 22.63 metres.

What is the difference in metres between the two records?

INTERVIEW 2 TASK 16

**I have 6 boxes filled with books.
Each box has 36 books.**



How many books are there altogether?

INTERVIEW 2 TASK 17

**There are 24 students in the class.
Three-eighths ($\frac{3}{8}$) of them are boys.**



How many boys are in the class?

INTERVIEW 2 TASK 18

**On a hot day the tomato plants used 1.5 litres of water.
On a cold day they used 0.885 litres.**



How much more water did the plants use on the hot day than the cold day?

INTERVIEW 2 TASK 19

**There are 12 eggs in a dozen.
Jess needs 180 eggs.**



How many dozens does Jess need?

INTERVIEW 2 TASK 20

In a big lolly packet there are 24 reds and 16 blacks.

A smaller packet with the same mix has a total of 10 lollies.



How many black lollies are in that packet?

INTERVIEW 2 TASK 21

Each netball bib takes 0.38 metres of cloth to make. You have 9.6 metres of cloth.



Is that enough cloth to make 25 bibs?

INTERVIEW 2 TASK 22

To make 8 aprons, it takes 6 metres of cloth.



How many metres would you need to make 20 aprons?