


# Hip Hup Hop

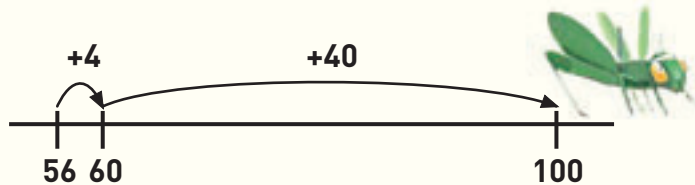
You need  empty number lines

## Activity

Gary the Grasshopper has to get from 56 to 100.




Gary hops like this:

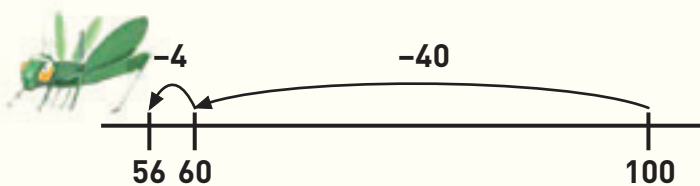


You can write Gary's hops as this number sentence:  
 $56 + 4 + 40 = 100$ .

Now Gary is on 100 and has to get back to 56.

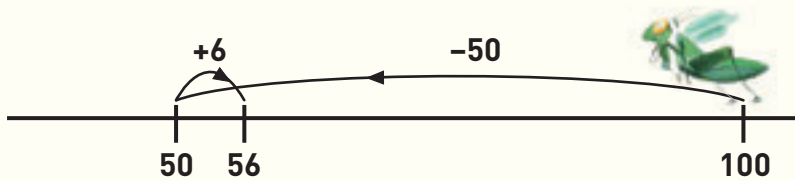


Gary could hop like this:



The number sentence for this is  $100 - 40 - 4 = 56$ .

Or Gary could hop like this:



The number sentence for this is  $100 - 50 + 6 = 56$ .



How far does Gary have to hop to get to the other number on the number lines shown below?

Draw the hops on your number lines to show how you worked out the answers.

Then write a number sentence for each problem.

