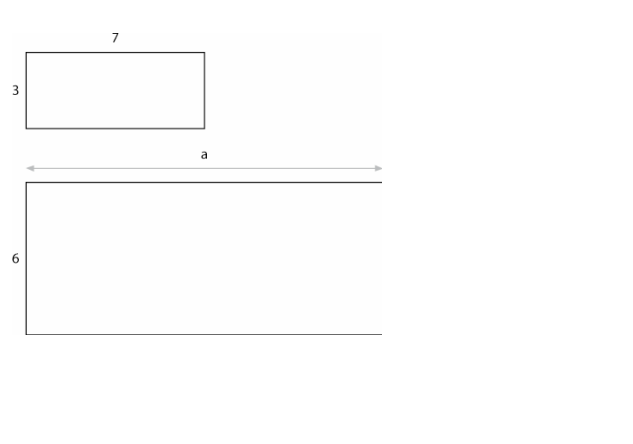
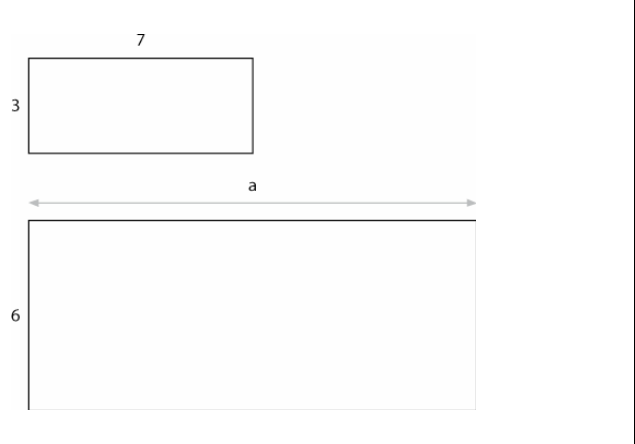
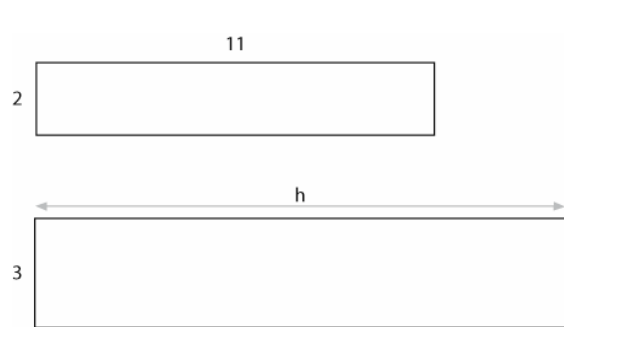
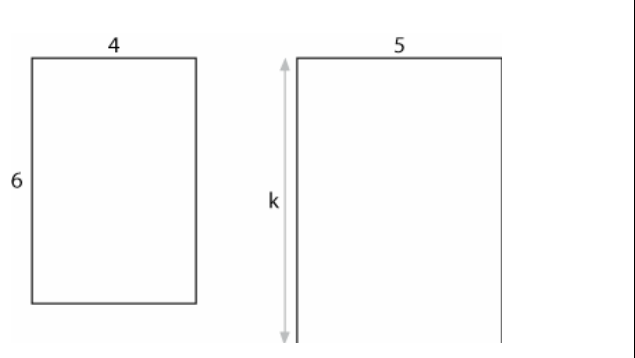
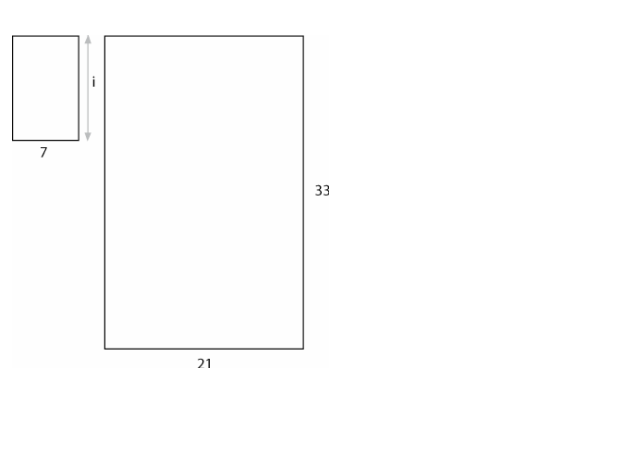
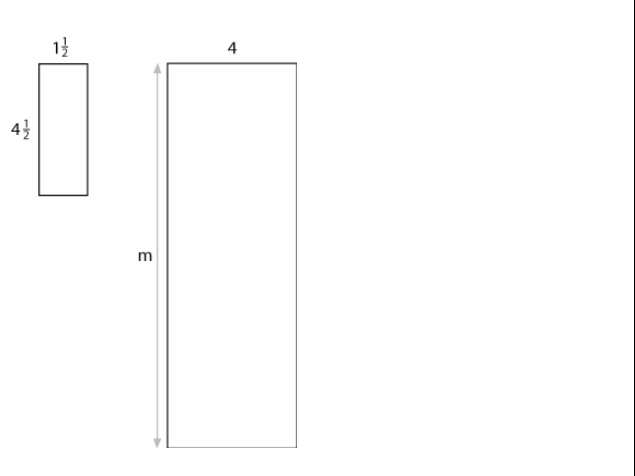


He Pānga Riterite


Whārangi Tārua 3

- Me mahi takirua ki te whakaoti i ēnei rapanga.
- Tuhia he pikitia, he tūtohi, he kauwhata rānei hei whakaatu i ngā kōrero matua o roto i te rapanga.
- Whakawhitiwhiti kōrero me tō kaiako mō te rautaki i whāia e kōrua ki te whakaoti i te rapanga.

1. He ōrite te āhua o ēnei takirua tapawhā hāngai. Tātaihia te roa o te tapa e tohua ana

2. E \$4.25 te utu ā-manokaramu (kg) mō te mīti kau. E hia te utu mō te 12.1 kg?
3. \$9.30 te utu mō te poro tīhi, e 3.1 kg te taumaha. E hia te utu mō te poro tīhi e 4.5 kg te taumaha?
4. E \$35 te utu hei hoko i te 28 kg pihikete kurī. E hia manokaramu ka taea te hoko mō te \$18?
5. E 37 meneti ka oti i a Haki te 8 km te omaoma. Mēnā he pērā anō te tere o tana omaoma, e hia te roa hei whakaoti māna i te 5 km?
6. E whakaritea ana tētahi ipu wai ārani hei inu mā ngā tamariki o tētahi akomanga. E toru ngā tohutaka mō te whakaranu i te inu:



Tohutaka 1

Kia 3 ngā kapu wai māori mō ia kapu wai ārani.



wai māori



wai ārani

Tohutaka 2

Kia 5 ngā kapu wai māori mō ia 2 kapu wai ārani.



wai māori



wai ārani

Tohutaka 3

Kia 9 ngā kapu wai māori mō ia 4 kapu wai ārani.



wai māori



wai ārani

a) Ko tā Merekara, he whakauru i te 15 kapu wai māori me te 6 kapu wai ārani. Ko tēhea te tohutaka e whai ana ia?

e) Ko tā Hinekura, he whakauru i te 45 kapu wai māori me te 20 kapu wai ārani. Ko tēhea te tohutaka e whai ana ia?

h) Ko tā Manahi, he whakauru i te 39 kapu wai māori me te 13 kapu wai ārani. Ko tēhea te tohutaka e whai ana ia?

i) Ko tēhea te tohutaka he tino kaha te hā o te ārani?