

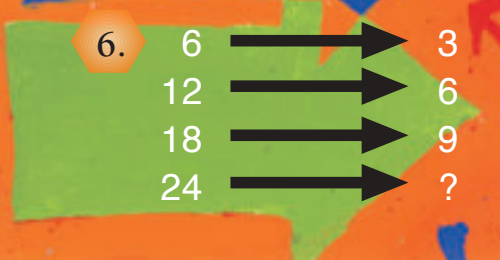

Follow That Arrow

Activity One

Look at the arrow diagrams below.

Something has changed the numbers on the left into the numbers on the right.

Write each diagram into your book, fill in the missing numbers, and explain how you got your answers.





Activity Two


There are five numbers beside each arrow diagram below.

Write in your book the number that should go at the end of each arrow so that all the arrows show the same relationship.

You can use each number only once. Two numbers in each diagram will be left over.

1. 

2. 

3. 

4. 