

Double Trouble

You need a bead frame

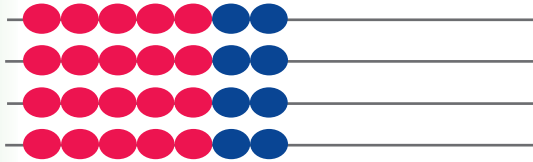
Activity

1. Look for patterns to help you to work out quickly how many beads there are altogether.


a. What is 2 lots of 7?



b. Double the answer that you got for 2 lots of 7 to find out what is 4 lots of 7.



c. How can that help you work out 8 lots of 7?




2. Now look at these doubling patterns:

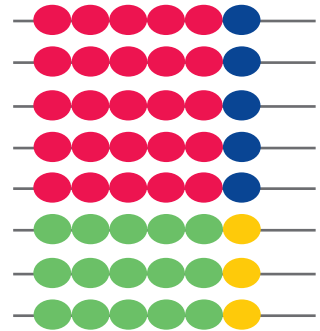
2 lots of 6 is 12.



4 lots of 6 is 24.



8 lots of 6 is 48.



Use doubling to work out what 2 lots, 4 lots, and 8 lots of each of these amounts would be:

a.

b.

c.

