


Archery Addition

ACTIVITY

Toline and Michael are working out their combined score for the first round of the archery contest.

My score is 26.



I got a score of 37 points.



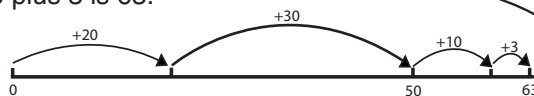
So we need to add $26 + 37$.



Toline worked out the total like this:



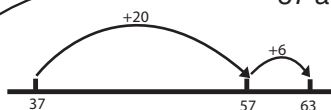
20 and 30 is 50.
6 and 7 is 13. 13 is 10 plus 3.
50 plus 10 plus 3 is 63.



Michael worked it out like this:



37 and 20 is 57.
57 and 6 is 63.



Here are their points for each round of the contest.

Round	Michael's points	Toline's points	Total
1	37	26	63
2	19	48	
3	33	49	
4	52	38	
5	48	35	

- How would Toline and Michael work out the total points for each round? Draw their number lines.
- In round 6, Michael scored 38 points and the total was 75 points. What was Toline's score?