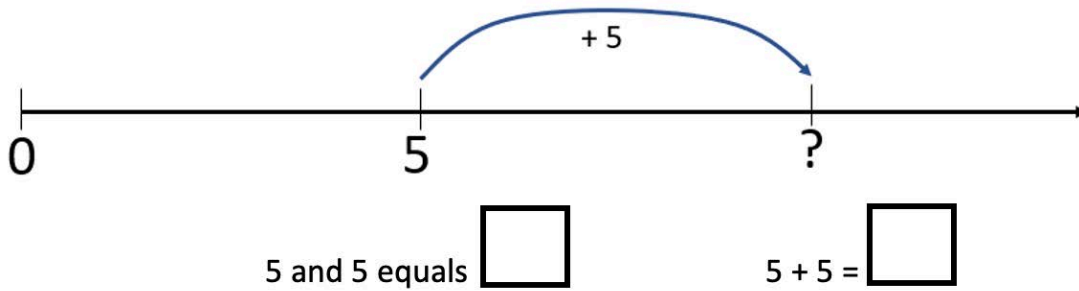


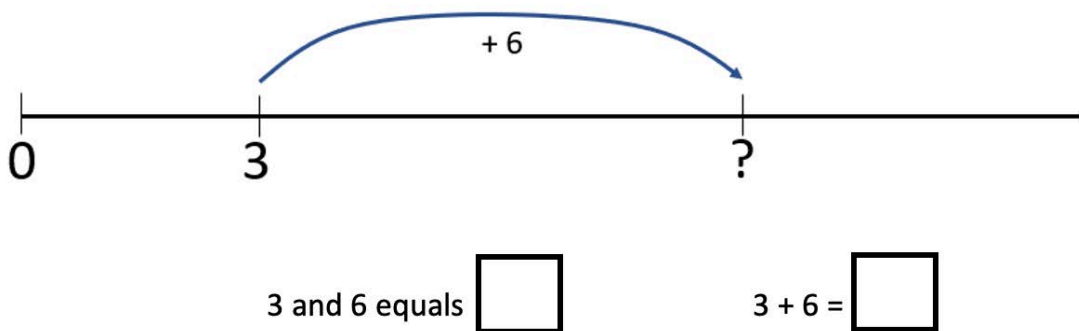
Ways to add: Mushrooms

Write the number sentences and equation for these problems.

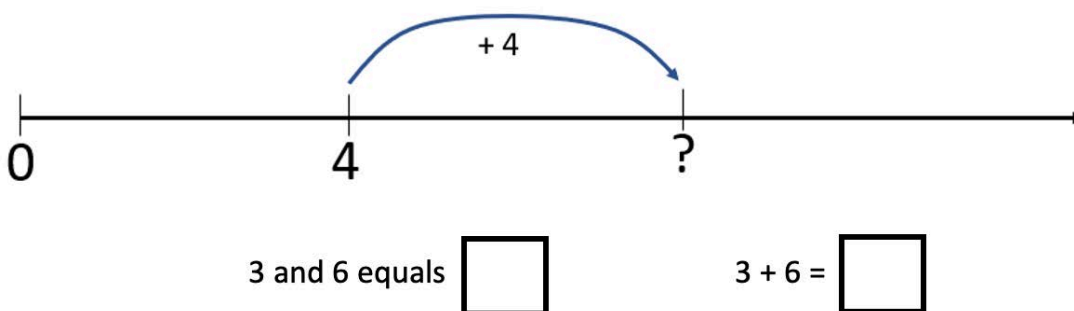
- a. You pick 5 mushrooms. Then you get 5 more mushrooms.
How many mushrooms do you have?



- b. You pick 3 mushrooms. Then you get 6 more mushrooms.
How many mushrooms do you have?

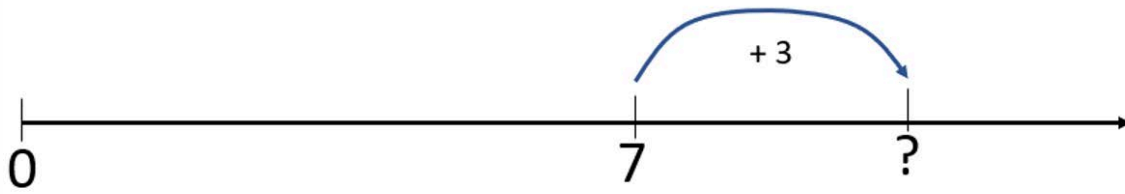


- c. You pick 4 mushrooms. Then you get 4 more mushrooms.
How many mushrooms do you have?



Ways to add: Mushrooms

d. You pick 7 mushrooms. Then you get 3 more mushrooms. How many mushrooms do you have?



3 and 6 equals

$3 + 6 =$

Draw number lines for these equation


e. 8 and 3 equals

$8 + 3 =$



f. 6 and 5 equals

$6 + 5 =$



g. 4 and 7 equals

$4 + 7 =$

