
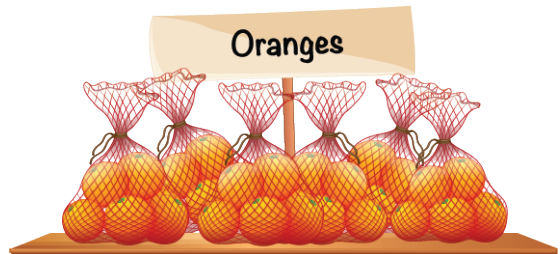


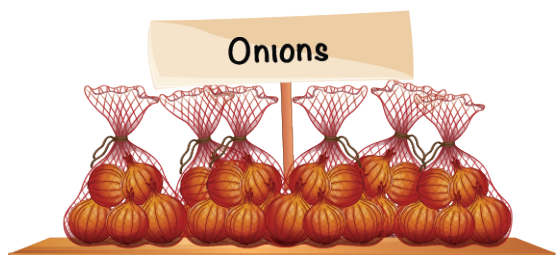
1. Potatoes cost \$3.00 per kilogram.
How much do you pay for a 5-kilogram bag of potatoes?



2. You pay \$20 for 5-kilograms of oranges.
What is the price of oranges per kilogram?



3. Onions cost \$6.00 for 4 kilograms.
How many kilograms of onions do you get for \$24.00?



4. You pay \$6.00 for 4 avocados.
How much will you pay for 10 avocados at the same price?



5. You pay \$28.00 for 10 litres of petrol.
How much will you pay for 2.5 litres at the same price?

