


1. The temperature in Napier is 22.5°C .
Draw the liquid level in the thermometer.



2. Early in the day, the temperature in Taupō is 9.7°C .
It rises by 8.5°C during the morning.
What is the temperature then?



3. The temperature in Gisborne is 35.4°C .
A cool breeze drops the temperature by 12.6°C .
What is the temperature then?

4. Here are the temperatures in Kerikeri and Whakatāne.
How much hotter is Kerikeri than Whakatāne?



Kerikeri is at 23.6°C

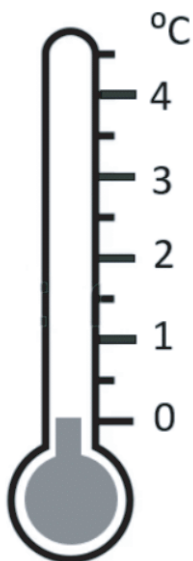


Whakatāne is at 18.9°C

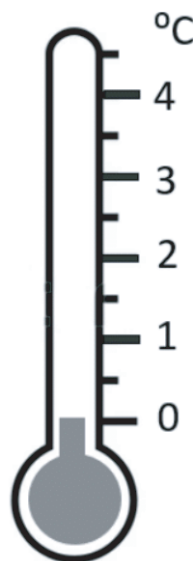
5. Draw on the thermometers to show the temperatures below them.



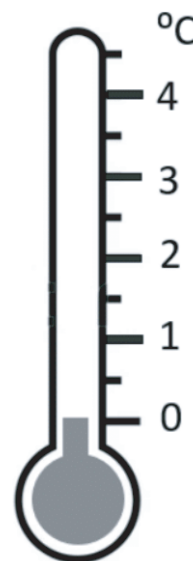
0.6°C



3.5°C



2.8°C



1.4°C

6. Use the clues to work out the temperature in each town.

The temperature in Ōpunake is 2.7°C warmer than the temperature in Hokitika. If you add the temperatures the total for both towns equals 23.3°C .



Hokitika



Ōpunake

7. The temperature at Lake Tekapo is 13.7°C cooler than the temperature at Kawakawa. If both temperatures increase by 5.4°C what will the difference be then?



Lake Tekapo



Kawakawa