



All these problems involve different numbers of children sharing time.


1. Share three hours of trampoline time equally among three children.




2. Share three hours of trampoline time equally among five children.



3. Share three hours of trampoline time equally among eight children.




4. Share four hours of trampoline time equally among three children.



5. Share two hours of trampoline time equally among five children.



6. Share 5 hours of trampoline time equally among four children.



7. The Hohepa family use the trampoline for three hours after school. Each child in the family got three sevenths of an hour on the trampoline. How many children are in the Hohepa whānau?

