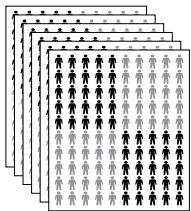



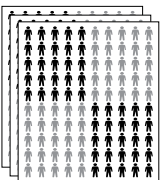

Whole number place value: Place value calculations

1. For each calculation show how you would rename the number to get a correct answer.


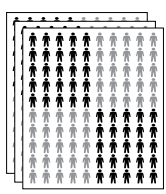

a) $650 + 80 = [\quad]$

6	5	0
Hundreds	Tens	Ones
		


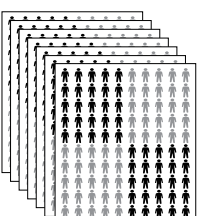
b) $340 - 70 = [\quad]$

3	4	0
Hundreds	Tens	Ones
		

c) $2\,360 - 500 = [\quad]$

2	3	6	0
Thousands	Hundreds	Tens	Ones
			

d) $4\,700 + 800 = [\quad]$

4	7	0	0
Thousands	Hundreds	Tens	Ones
			

2. Use your place value skills to solve these problems.
Use Place Value People to help if you need to.

Twizel has a population of 1280 people.
900 people arrive for a water-skiing tournament.

How many people are in Twizel now?



Kaitaia has a population of 5 860.
On February 6th, 2 090 people travel to the
celebrations at Waitangi.

How many people are left in Kaitaia?



Wairoa has a population of 4 290 people



Whitianga has a population of 5 080 people.



How many more people does Whitianga have than Wairoa?