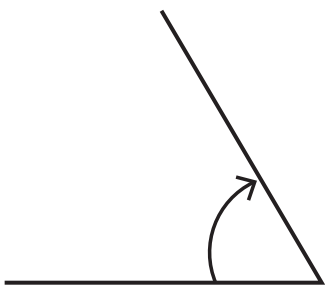


Measuring Angles: 2

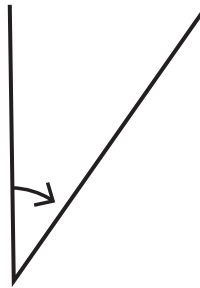
Estimate the size of these angles accurately. Write your estimates and measures in the table.

angle	estimate	accurate measure
a		
b		
c		
d		
e		
f		

a.



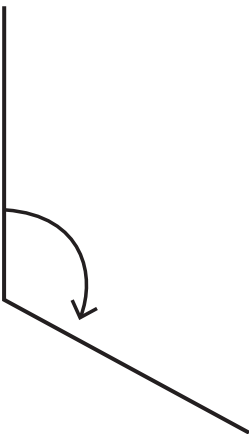
b.



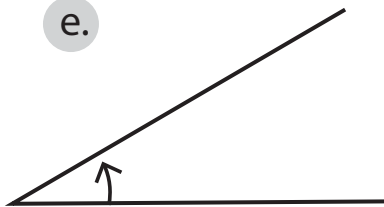
c.



d.



e.



f.

