

# Calculation Chains

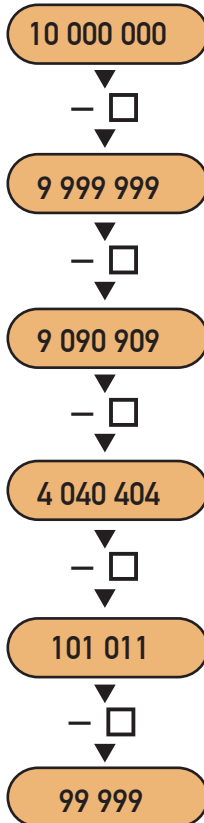
You need  a calculator

a classmate

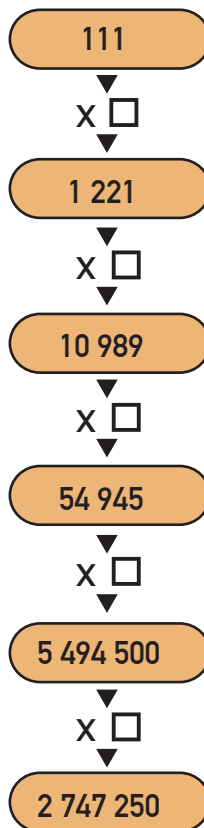
## Activity



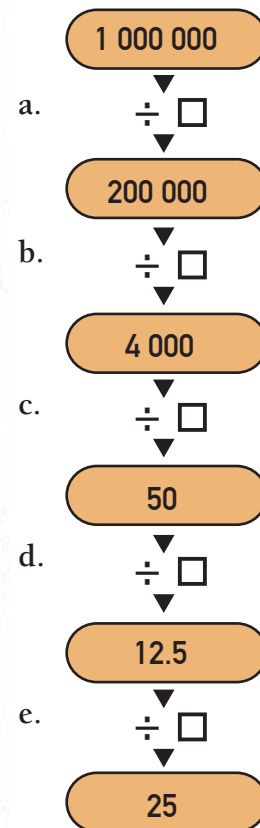
1. David started with the number 10 000 000 in his calculator. Each time he took away a number, he wrote down the answer in the next box in the calculation chain. What numbers did David take away each time?



2. Paige began with the number 111 in her calculator. Each time she multiplied by a number, she wrote down the answer. What numbers did Paige multiply by each time?



3. Ngaria made up a division chain, starting with the number 1 000 000. What numbers did Ngaria divide by each time?



4. Make up a calculation chain problem for a classmate to solve.