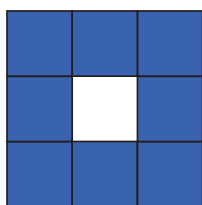



**This pattern is an 'O' pattern.**


Draw the missing shape. Check it by completing the table.




first 'O'



second 'O'



third 'O'



fourth 'O'

'O' number	1	2	3	4	5	6	7
Number of tiles							