
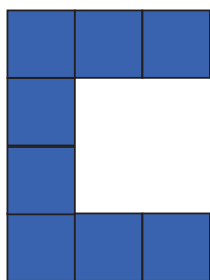


**This pattern is an 'C' pattern.**


Draw the missing shape. Check it by completing the table.




first 'C'



second 'C'



third 'C'



fourth 'C'

'C' number	1	2	3	4	5	6	7
Number of tiles							