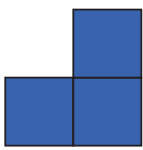
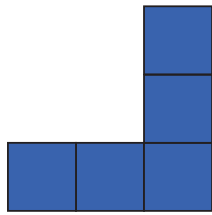


**This pattern is an 'J' pattern.**


Draw the missing shape. Check it by completing the table.



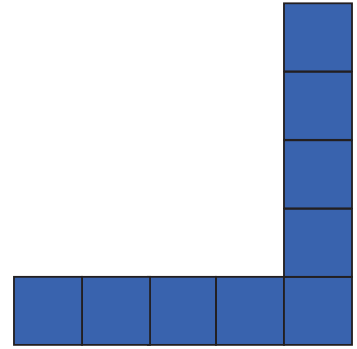
first 'J'



second 'J'



third 'J'



fourth 'J'

'J' number	1	2	3	4	5	6	7
Number of tiles							